

O. P. JINDAL SCHOOL, SAVITRI NAGAR
Periodic Test - I (2025 – 2026) Round-1

Class / Section: III/ _____

MM: 20

Subject: Mathematics

Time: 1 Hr.

Name: _____

Roll No.: _____

Invigilator's Sign: _____

Marks Obtained: _____

Examiner's Sign: _____

General Instructions: All questions are compulsory.

Question 1 to 8 are of 1 Mark each.

Question 9 to 11 are of 2 Marks each.

Question 12 and 13 are of 3 Marks each.

Section- A**Question numbers 1 to 8 carry 1 mark each.**1. What is the number name for **42**?

- a) Forty-two b) Forty c) Twenty-five d) Twenty

2. How many letters are there in the word **eighty-eight**?

- a) 11 b) 12 c) 13 d) 14

3. A ball is an example of _____.

- a) Cube b) Cuboid c) Cylinder d) Sphere

4. Place value of **6** in **264** is _____.

- a) 600 b) 6 c) 60 d) 0

5. Write the number name for:

124 - _____.

6. Write any one house hold object which needs electricity. _____

7. My number name has two words. The first word has 6 letters and second word has 5 letters. Who am I?

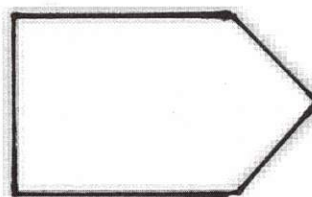

8. Compare: use $<$, $>$ or $=$

$$600 + 40 \underline{\hspace{2cm}} 666$$

Section- B

Question numbers 9 to 11 carry 2 marks each.

9. Draw the line of symmetry:



10. Write the next numbers.

210, 215, 220, _____, _____.

11. Write in ascending order.

305, 530, 350, 503

Section- C

Question numbers 12 and 13 carry 3 marks each.

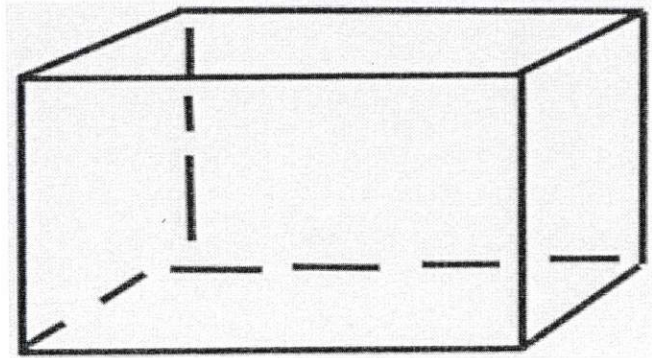
12. Write 3 house hold objects that don't need electricity.

a. _____

b. _____

c. _____

13. Write the following.



a. Faces = _____

b. Vertices = _____

c. Edges = _____
